

Handwriting practice for the letter 'L'. The word 'L' is written in a large, dotted font. Below it, the letter 'L' is repeated in a smaller, dotted font. Each letter has a small black dot at the top left and a small arrow pointing to the right, indicating the starting point and direction of the stroke.





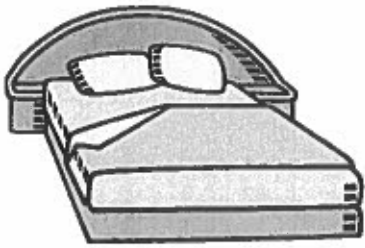
Handwriting practice for the letter 'M'. The word 'M' is written in a large, dotted font. Below it, the letter 'M' is repeated in a smaller, dotted font. Each letter has a small black dot at the top left and a small arrow pointing to the right, indicating the starting point and direction of the stroke.

Handwriting practice for the letter 'R'. The word 'R' is written in a large, dotted font. Below it, the letter 'R' is repeated in a smaller, dotted font. Each letter has a small black dot at the top left and a small arrow pointing to the right, indicating the starting point and direction of the stroke.

Handwriting practice for the letter 'S'. The word 'S' is written in a large, dotted font. Below it, the letter 'S' is repeated in a smaller, dotted font. Each letter has a small black dot at the top left and a small arrow pointing to the right, indicating the starting point and direction of the stroke.

Mixed CVC Words: Middle a, e, i, o, u Name _____

Write the words to go with each picture.



Can you think of any other words?

















___ a ___ ___ e ___ ___ i ___
___ o ___ ___ u ___

Name: _____

Date: _____

sh, ch or th?

Decide which sound these words contain: sh, ch or th. Write the word in the box underneath the picture.

Turn over this page and try to write some other words which have sh, ch and th in them.

Name: _____

Date: _____

sh, ch or th?

Match the parts of the word to make your own 'th' words.



p	_____	a	_____	nk
b		e	_____	th
m		i	_____	ng
t		o	_____	s
th		u	_____	n
cl		ee	_____	d



path, _____

Match the parts of the word to make your own 'sh' words.




f		a		t
b		e	_____	sh
r		i	_____	p
t		o	_____	ck
sh	_____	u	_____	ll
br		ee	_____	d



shed, _____

Match the parts of the word to make your own 'ch' words.


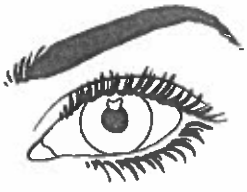


f		a		n
b		e		ch
s		i	_____	p
r		o	_____	ck
ch	_____	u	_____	ll
m		ai	_____	t



chip, _____

Spelling Words with 'ee'




Look → Say → Cover → Write → Check

	Try 1	Try 2	Try 3
see			
free			
tree			
knee			
deep			
weep			
creep			
sheep			
sweep			
teeth			
green			
seed			

oo

b g g y s y t m m n t x
e a i s c y x s a g r l
s t m i h e u u p r o q
b a h b o k b a b o o n
q s f p o h i t p o o i
f h m f l o t d h m v n
o o b o o k e r o t u f
o o q h o k b l o o c i
l k z p o t e u k o x n
i b m o o n h x s l w i
s o r a o v v i q i q y
h c c o o k k n e t h n



spoon
crooked
foolish
tool

pool
school
baboon
book



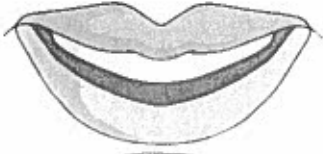








groom
bamboo
cook
hook

smoothie
zoo
shook
moon



'th' Read and Write

Read the 'th' words below. Look at the pictures and write each word under the correct picture. Read the word again to make sure it's correct.

thumb	path	thorn	earth	moth	three
thirty	mouth	tooth	cloth	bath	thief
					
					
30					
					

Missing Numbers

Fill in the missing numbers from these sections of hundred squares.

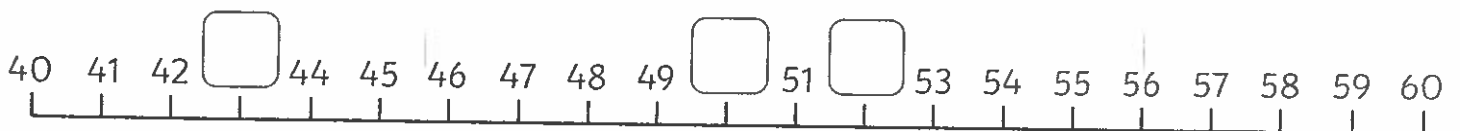
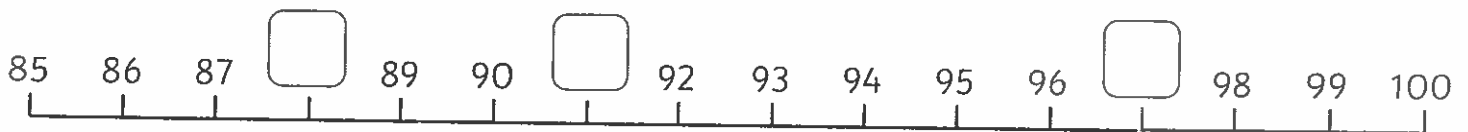
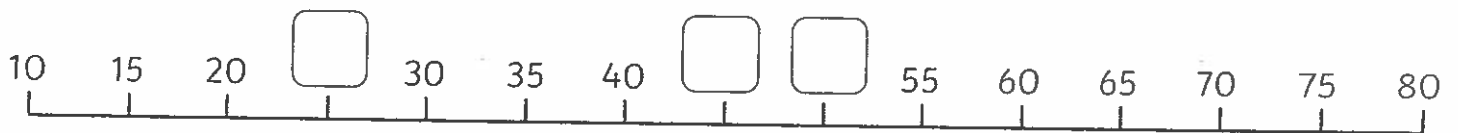
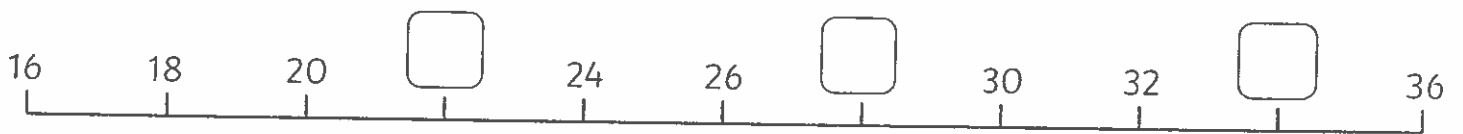
14	15		17
	25	26	

83		85	86
93			96

36	37	
		48
56	57	58

		10
18	19	20
28	29	

Fill in the missing numbers in these number lines.



Mad Maths Minutes 1

Addition/Subtraction (within 10) Set C

$10 - 8 =$

$8 + 1 =$

$9 + 0 =$

$0 + 10 =$

$8 - 2 =$

$9 - 3 =$

$7 + 3 =$

$8 - 5 =$

$2 + 6 =$

$10 - 5 =$

$7 - 5 =$

$7 + 1 =$

$6 + 4 =$

$4 + 5 =$

$10 - 7 =$

$10 - 7 =$

$6 + 2 =$

$6 + 2 =$

$8 - 1 =$

$8 - 1 =$

$7 + 1 =$

$3 + 5 =$

$3 + 0 =$

$6 + 3 =$

$4 + 6 =$

$10 - 1 =$

$4 + 5 =$

$4 + 5 =$

$10 - 4 =$

$10 - 9 =$

Mad Maths Minutes 2

Addition/Subtraction (within 10) Set D

$3 + 6 =$

$5 + 3 =$

$9 + 0 =$

$10 - 3 =$

$9 + 1 =$

$9 - 9 =$

$4 + 4 =$

$8 - 3 =$

$10 - 10 =$

$2 + 8 =$

$8 - 4 =$

$6 + 3 =$

$6 + 3 =$

$9 - 5 =$

$7 - 5 =$

$10 - 5 =$

$10 - 4 =$

$7 + 1 =$

$10 - 2 =$

$8 - 7 =$

$6 + 2 =$

$6 - 3 =$

$8 + 0 =$

$2 + 7 =$

$13 - 2 =$

$10 - 0 =$

$9 - 8 =$

$6 + 2 =$

$10 - 6 =$

$7 - 1 =$

Mad Maths Minutes 5

Make 10 / Make 20 Set A

$5 + \underline{\quad} = 10$	$\underline{\quad} + 4 = 10$
$15 + \underline{\quad} = 20$	$\underline{\quad} + 14 = 20$
$5 + \underline{\quad} = 20$	$\underline{\quad} + 4 = 20$
$\underline{\quad} + 7 = 10$	$8 + \underline{\quad} = 10$
$\underline{\quad} + 17 = 20$	$18 + \underline{\quad} = 20$
$\underline{\quad} + 7 = 20$	$18 + \underline{\quad} = 20$
$\underline{\quad} = 10$	$\underline{\quad} + 9 = 10$
$\underline{\quad} = 20$	$\underline{\quad} + 10 = 20$
$\underline{\quad} = 20$	$\underline{\quad} + 9 = 20$
$\underline{\quad} = 10$	$10 + \underline{\quad} = 10$
$\underline{\quad} = 10$	$10 + \underline{\quad} = 20$
$\underline{\quad} = 20$	$20 + \underline{\quad} = 20$
$\underline{\quad} = 10$	$\underline{\quad} + 6 = 10$
$\underline{\quad} = 20$	$\underline{\quad} + 15 = 20$
$\underline{\quad} = 20$	$\underline{\quad} + 6 = 20$


Mad Maths Minutes 6

Make 10 / Make 20 Set B

$1 + \underline{\quad} = 10$	$\underline{\quad} + 9 = 10$
$11 + \underline{\quad} = 20$	$\underline{\quad} + 10 = 20$
$1 + \underline{\quad} = 20$	$\underline{\quad} + 9 = 20$
$\underline{\quad} + 3 = 10$	$5 + \underline{\quad} = 10$
$\underline{\quad} + 12 = 20$	$15 + \underline{\quad} = 20$
$\underline{\quad} + 13 = 20$	$5 + \underline{\quad} = 10$
$7 + \underline{\quad} = 10$	$\underline{\quad} + 11 = 10$
$\underline{\quad} = 20$	$\underline{\quad} + 15 = 20$
$\underline{\quad} = 20$	$\underline{\quad} + 11 = 20$
$\underline{\quad} + 5 = 10$	$\underline{\quad} = 10$
$\underline{\quad} + 10 = 20$	$10 + \underline{\quad} = 20$
$\underline{\quad} + 6 = 20$	$4 + \underline{\quad} = 10$
$10 + \underline{\quad} = 10$	$\underline{\quad} + 3 = 10$
$10 + \underline{\quad} = 20$	$\underline{\quad} + 12 = 20$
$10 + \underline{\quad} = 20$	$\underline{\quad} + 10 = 20$

Things That Make Me Happy

What makes you happy? Have a think and talk about your ideas with a grown-up and your friends. Draw an idea into each thought bubble – you can draw a smiley, happy picture of you too!



Feeling Sad? What Can I do?

Feeling sad, feeling blue? Draw some things that you can do!

Draw things in the balloons that will help lift your spirits when you are feeling sad.

Someone who
can help is...

Something I
can do is...

Someone I can
talk to is...

A song I can
listen to is...

Something that can
cheer me up is...

